
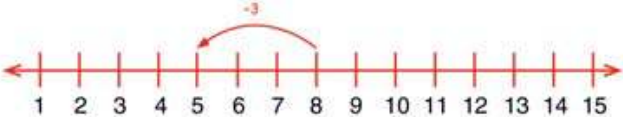

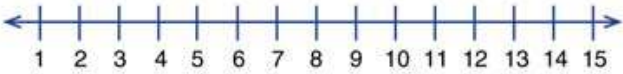

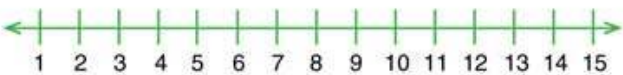



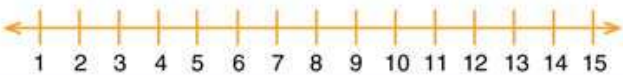
NAME: \_\_\_\_\_



## COUNTING BACK


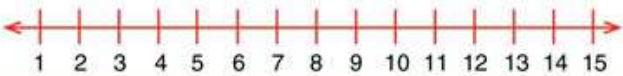
  $8 - 3 = \underline{5}$  


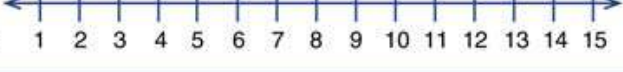
  $5 - 4 = \underline{\quad}$  

  $9 - 5 = \underline{\quad}$  

  $7 - 2 = \underline{\quad}$  

  $8 - 4 = \underline{\quad}$  

  $10 - 6 = \underline{\quad}$  

  $12 - 8 = \underline{\quad}$  

How Did You Do? 