
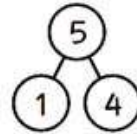



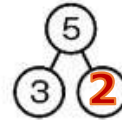
NAME: \_\_\_\_\_

## SUBTRACTION

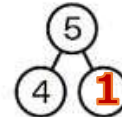
Find the differences. Look at the example.




$$5 - 3 = 2$$



$$5 - 4 = 1$$



$$3 - 0 = 3$$



$$5 - 5 = 0$$



How Did You Do?