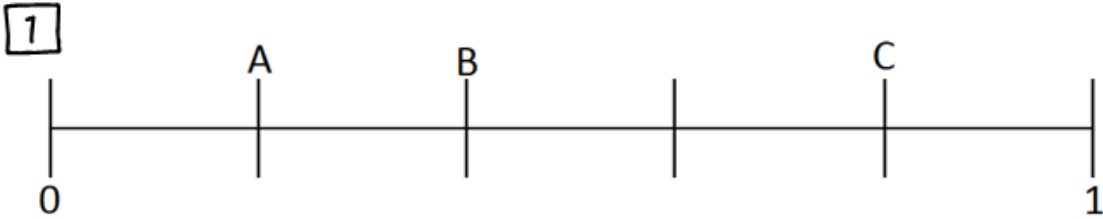


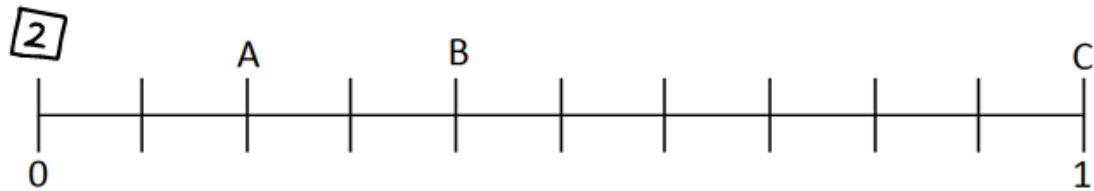
NAME: _____

FRACTIONS ON A NUMBER LINE

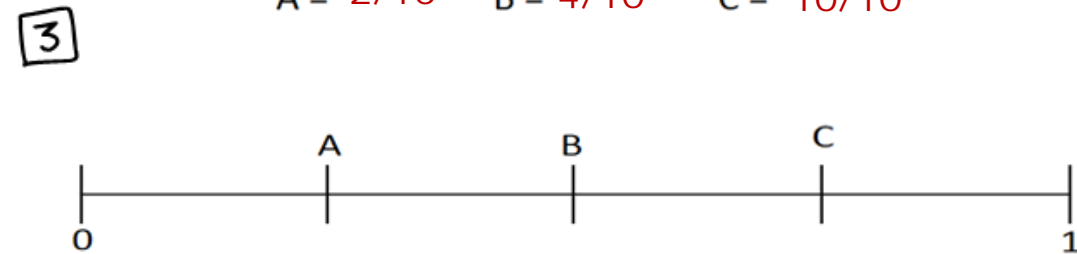
Write a fraction for each letter on the number line below.



$A = 1/5$ $B = 2/5$ $C = 4/5$



$A = 2/10$ $B = 4/10$ $C = 10/10$



$A = 1/4$ $B = 2/4$ $C = 3/4$

How Did You Do? 😊 😐 ☹️