
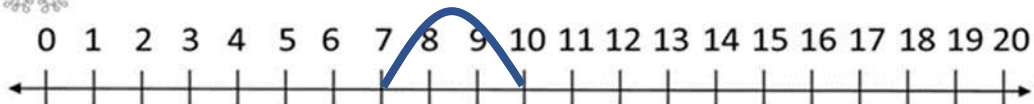


NAME: \_\_\_\_\_


## SUBTRACTION ON A NUMBER LINE



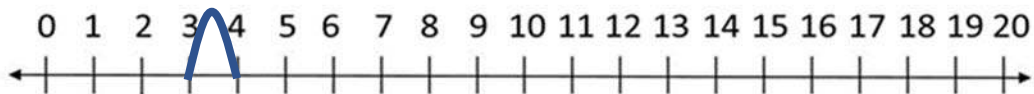
$$7 - 2 = \boxed{5}$$




$$10 - 3 = \boxed{7}$$



$$5 - 2 = \boxed{3}$$



$$4 - 1 = \boxed{3}$$



$$6 - 5 = \boxed{1}$$

How Did You Do? 😊 😐 ☹️