




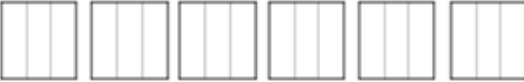




NAME: \_\_\_\_\_

## MULTIPLYING FRACTIONS

Shade in the model to show the fraction as a product of a whole number and a unit fraction. Then write the equation.

Fraction	Model	Equation
$\frac{3}{2}$		
$\frac{5}{4}$		
$\frac{4}{3}$		
$\frac{2}{5}$		
$\frac{3}{4}$		
$\frac{6}{3}$		
$\frac{4}{2}$		
$\frac{3}{5}$		

How Did You Do? 😊 😐 😞