
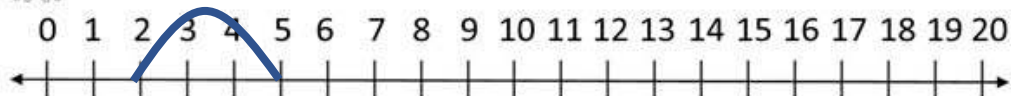


NAME: \_\_\_\_\_


## SUBTRACTION ON A NUMBER LINE




$$3 - 2 = \boxed{1}$$




$$5 - 3 = \boxed{2}$$



$$8 - 1 = \boxed{7}$$



$$7 - 1 = \boxed{6}$$



$$5 - 5 = \boxed{0}$$

How Did You Do? 😊 😐 ☹️