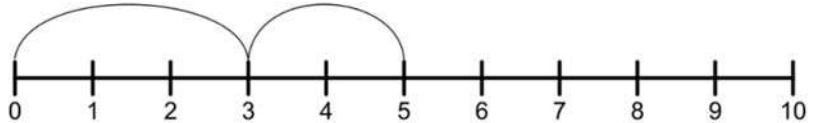


Name _____

Addition

Using Number line

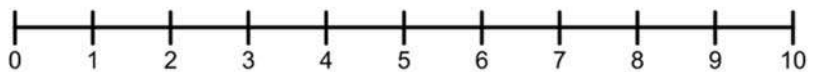
$3 + 2 = \boxed{5}$



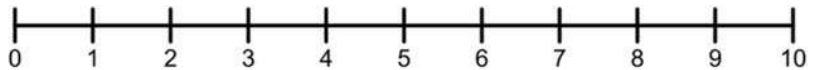
$4 + 5 = \square$



$5 + 3 = \square$



$6 + 2 = \square$



$3 + 4 = \square$



$7 + 1 = \square$

