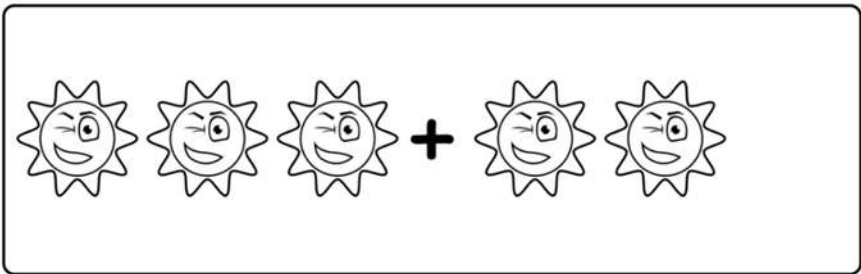


Name _____


Addition

Count the images and add the total numbers of objects.



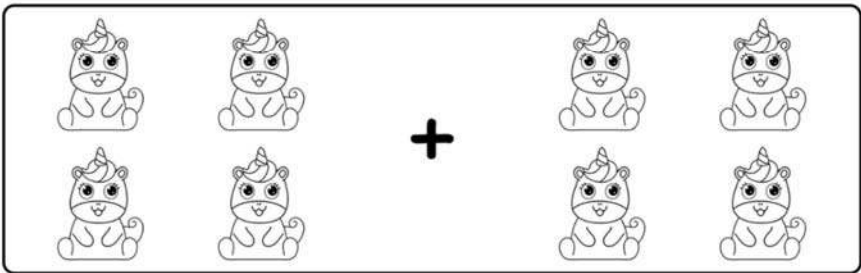
Three smiling suns are shown on the left, followed by a plus sign, and two smiling suns are shown on the right. To the right of the plus sign is an equals sign followed by a square box containing the number 5.

$$3 + 2 = 5$$




Five kittens are shown on the left (three in the top row and two in the bottom row), followed by a plus sign, and four kittens are shown on the right (three in the top row and one in the bottom row). To the right of the plus sign is an equals sign followed by a square box containing the number 9.

$$5 + 4 = 9$$



Four unicorns are shown on the left (two in the top row and two in the bottom row), followed by a plus sign, and four unicorns are shown on the right (two in the top row and two in the bottom row). To the right of the plus sign is an equals sign followed by a square box containing the number 8.

$$4 + 4 = 8$$



Two seals are shown on the left, followed by a plus sign, and one seal is shown on the right. To the right of the plus sign is an equals sign followed by a square box containing the number 3.

$$2 + 1 = 3$$