



Name _____

Addition

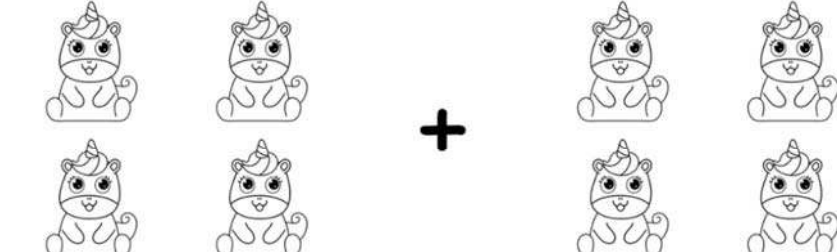
Count the images and add the total numbers of objects.




Three smiling suns are shown on the left, followed by a plus sign, and two smiling suns are shown on the right. To the right of the entire row is an equals sign followed by an empty square box.



Five cats are shown in two rows: three in the top row and two in the bottom row. A plus sign is in the center, followed by three cats in a single row. To the right of the entire row is an equals sign followed by an empty square box.



Four unicorns are shown in two rows: two in the top row and two in the bottom row. A plus sign is in the center, followed by four unicorns in two rows: two in the top row and two in the bottom row. To the right of the entire row is an equals sign followed by an empty square box.



Two seals are shown on the left, followed by a plus sign, and one seal is shown on the right. To the right of the entire row is an equals sign followed by an empty square box.