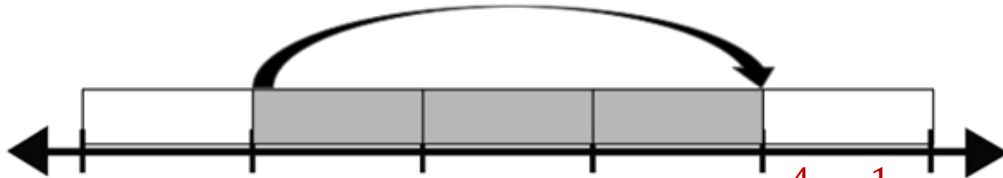


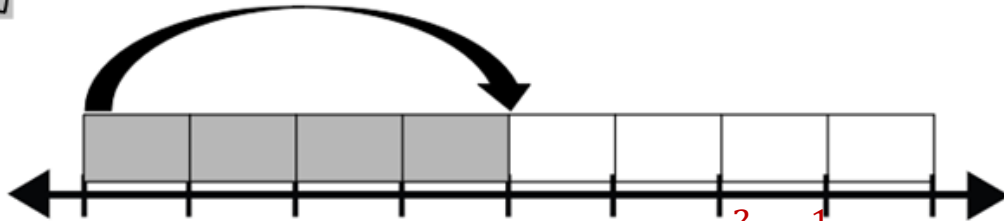
NAME: \_\_\_\_\_

## FRACTIONS ON A NUMBER LINE

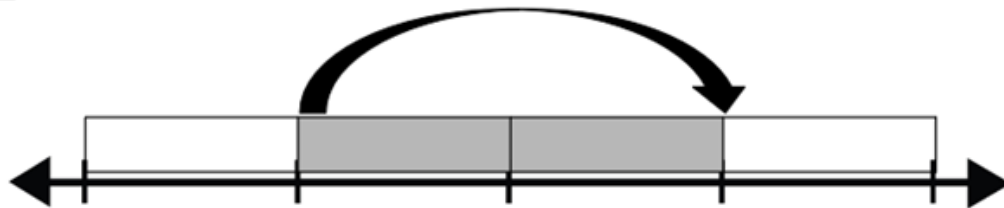
1 what fraction of the number line is shaded? \_\_\_\_\_  $\frac{3}{5}$



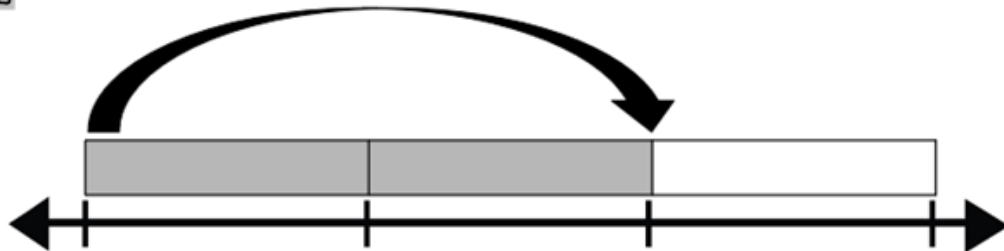
2 what fraction of the number line is shaded? \_\_\_\_\_  $\frac{4}{8}$  or  $\frac{1}{2}$



3 what fraction of the number line is shaded? \_\_\_\_\_  $\frac{2}{4}$  or  $\frac{1}{2}$



4 what fraction of the number line is shaded? \_\_\_\_\_  $\frac{2}{3}$



How Did You Do? 😊 😐 ☹️