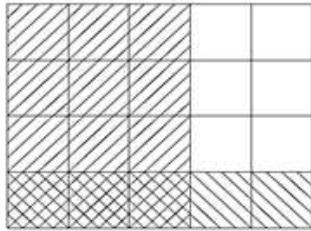


NAME: _____

MULTIPLYING FRACTIONS

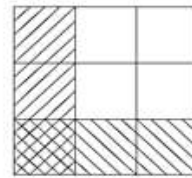
Find the product using the area model.

1)



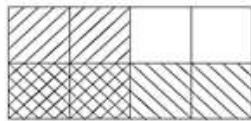
$$\frac{3}{5} \times \frac{1}{4} = \frac{3}{20}$$

2)



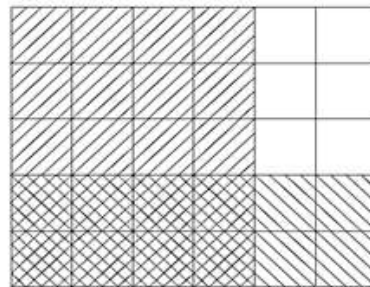
$$\frac{1}{3} \times \frac{1}{3} = \frac{1}{9}$$

3)



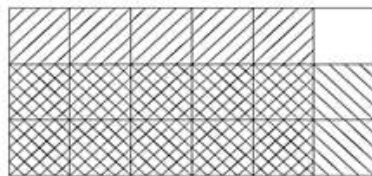
$$\frac{2}{4} \times \frac{1}{2} = \frac{1}{4}$$

4)




$$\frac{4}{6} \times \frac{2}{5} = \frac{4}{15}$$

5)



$$\frac{5}{6} \times \frac{2}{3} = \frac{5}{9}$$

6)



$$\frac{2}{2} \times \frac{3}{4} = \frac{3}{4}$$

How Did You Do? 😊 😐 😞