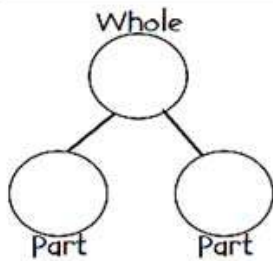


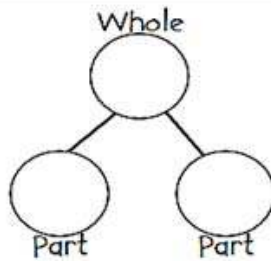
NAME: _____

DECOMPOSING NUMBERS

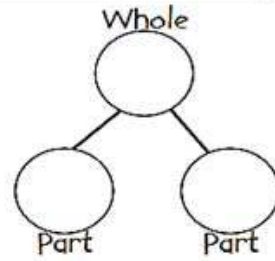
Your teacher will tell you how many chips to begin with. This is your **WHOLE** number. Spill the chips out of your cup and determine the two **PARTS** that you can **DECOMPOSE** your number into.



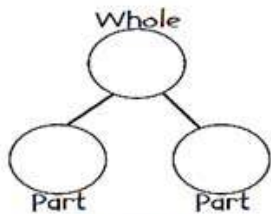
Number Sentence:
____ + ____ = ____



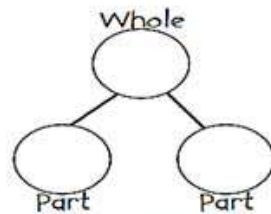
Number Sentence:
____ + ____ = ____



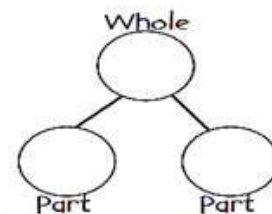
Number Sentence:
____ + ____ = ____



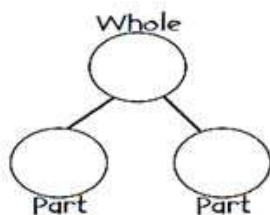
Number Sentence:
____ + ____ = ____



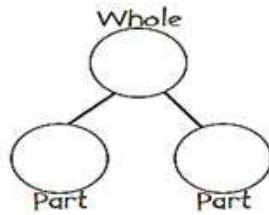
Number Sentence:
____ + ____ = ____



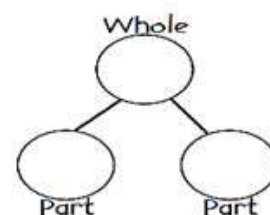
Number Sentence:
____ + ____ = ____



Number Sentence:
____ + ____ = ____



Number Sentence:
____ + ____ = ____



Number Sentence:
____ + ____ = ____

QUALIFICATION:

