

NAME: -----

BOX METHOD MULTIPLICATION

Work out the answer to these multiplication questions using the box method.

❖ $41 \times 35 = 1435$

	40	1		
30	1200	30		1200
				30
5	200	5		200
				+ 5
				1435

❖ $58 \times 19 = \underline{\hspace{2cm}}$

X	50	8		
10	500	80	⇒	580
9	450	72	⇒	522
				1102

❖ $24 \times 18 = \underline{\hspace{2cm}}$

X	20	4		
10	200	40	⇒	240
8	160	32	⇒	192
				432

❖ $65 \times 15 = \underline{\hspace{2cm}}$




X	60	5		
10	600	50	⇒	650
5	300	25	⇒	325
				975

❖ $34 \times 24 = \underline{\hspace{2cm}}$

X	30	4		
20	600	80	⇒	680
4	120	16	⇒	136
				816

❖ $76 \times 12 = \underline{\hspace{2cm}}$

X	70	6		
10	700	60	⇒	760
2	140	12	⇒	152
				912

..    .. How Did You Do? 