

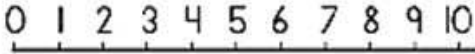


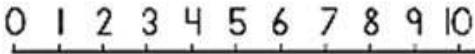



NAME: _____

SUBTRACTION WITH NUMBER LINES

 0 1 2 3 4 5 6 7 8 9 10	$2 - 2 =$ 0
 0 1 2 3 4 5 6 7 8 9 10	$6 - 3 =$ 3
 0 1 2 3 4 5 6 7 8 9 10	$7 - 4 =$ 3
 0 1 2 3 4 5 6 7 8 9 10	$8 - 2 =$ 6
 0 1 2 3 4 5 6 7 8 9 10	$9 - 5 =$ 4
 0 1 2 3 4 5 6 7 8 9 10	$10 - 1 =$ 9
 0 1 2 3 4 5 6 7 8 9 10	$3 - 2 =$ 1

How Did You Do? 