



Answer Key 11

NAME: _____

DECOMPOSING NUMBERS



4. Use the counters to show different ways to decompose 8.

 ____ + ____ = ____	 ____ + ____ = ____
---	--

Answers Vary



Brad saw 6 foxes. His friend saw 2 more foxes. How many foxes did they see in all? **8**

 ____ + ____ = ____	Complete the number bond 
---	--

Answers Vary

6. What does **decompose** mean?

- A. to add together
- B. to subtract numbers
- C. to break apart in smaller pieces**

QUALIFICATION: 😊 😐 😞