


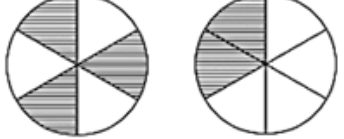
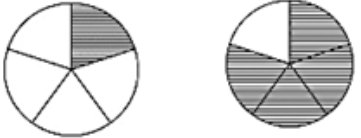

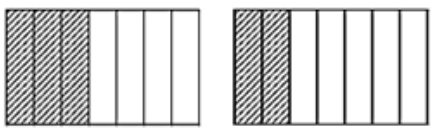
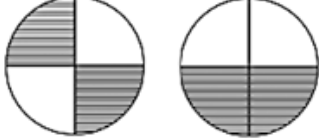


NAME: _____

COMPARE FRACTIONS

Identify the fractions and compare them using $<$, $>$, or $=$.

1  <input type="text"/> <input type="text"/> <input type="text"/>	5  <input type="text"/> <input type="text"/> <input type="text"/>
2  <input type="text"/> <input type="text"/> <input type="text"/>	6  <input type="text"/> <input type="text"/> <input type="text"/>
3  <input type="text"/> <input type="text"/> <input type="text"/>	7  <input type="text"/> <input type="text"/> <input type="text"/>
4  <input type="text"/> <input type="text"/> <input type="text"/>	8  <input type="text"/> <input type="text"/> <input type="text"/>

How Did You Do? 😊 😐 😞