



NAME: _____

SUBTRACT


Number line subtraction


$17 - 6 = 11$ 


$11 - 3 = 8$ 


$15 - 5 = 10$ 


$14 - 2 = 12$ 

$19 - 5 = 14$ 

$18 - 4 = 14$ 

$12 - 6 = 6$ 

$20 - 9 = 11$ 

$18 - 8 = 10$ 

How Did You Do? 