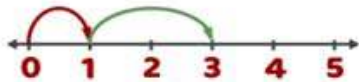


NAME: _____

NUMBER LINES: SUM UP TO 5

Look at the number lines and complete the addition sentences.

$$1 + 2 = 3$$



$$3 + 1 = 4$$



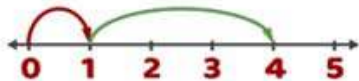
$$2 + 3 = 5$$



$$1 + 4 = 5$$



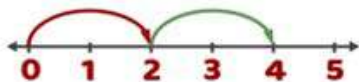
$$1 + 3 = 4$$



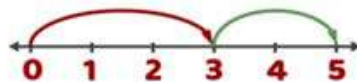
$$4 + 1 = 5$$



$$2 + 2 = 4$$



$$3 + 2 = 5$$



How Did You Do? 😊 😐 😞