




































NAME: _____

MENTAL MATH

Follow the directions and fill in the correct amount on each taco.

Subtract 100 less	Subtract 10 less	Number	Add 10 more	Add 100 more
 577	 667	 677	 687	 777
 488	 578	 588	 598	 688
 606	 696	 706	 716	 806
 33	 123	 133	 143	 233
 235	 325	 335	 345	 435
 234	 324	 334	 344	 434
 757	 847	 857	 867	 957

How Did You Do? 😊 😐 ☹️