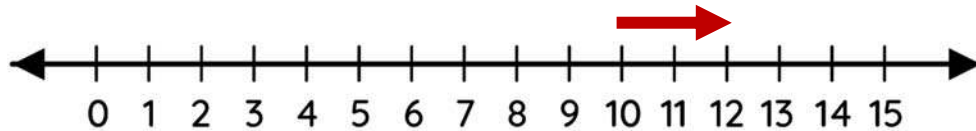


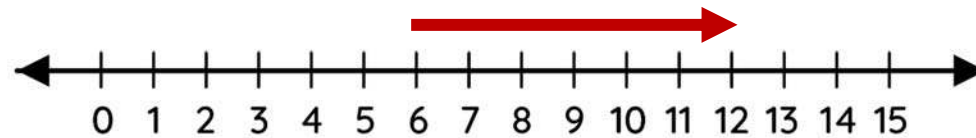
Name _____

Number line addition

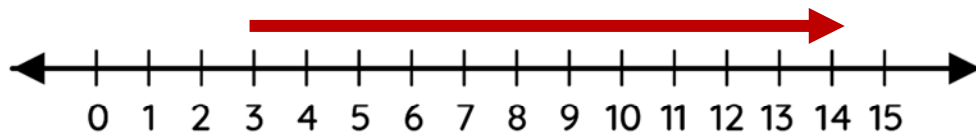
Solve the addition using number lines.



$$10 + 2 = 12$$



$$6 + 6 = 12$$



$$3 + 11 = 14$$