

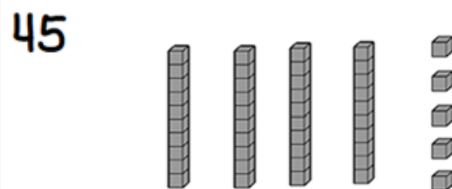
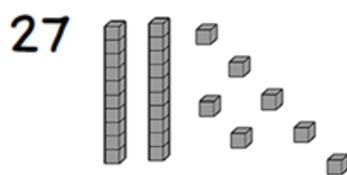
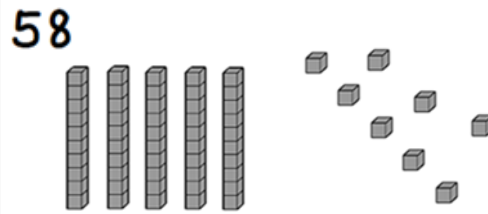
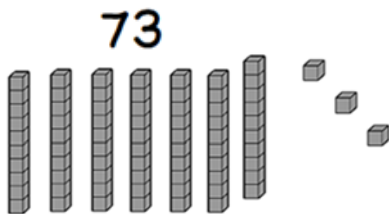
NAME: \_\_\_\_\_

## BASE TEN BLOCKS WORKSHEETS

Directions: Write the number.

- Two tens and four ones is 24.
- Three tens and three ones is 33.
- Six tens and eight ones is 68.
- Five tens and two ones is 52.
- Seven tens and one one is 71.
- Four tens and six ones is 46.

Directions: Draw the number with base ten blocks.



How Did You Do? 😊 😐 ☹️