

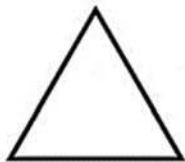
Answer Key

NAME: _____

COUNTING CORNERS AND SIDES

Write down the number of sides and corners for each shape.

(a)



 3 Side (s)

 3 Corner (s)

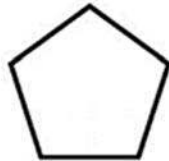
(b)



 4 Side (s)

 4 Corner (s)


(c)



 5 Side (s)

 5 Corner (s)


(d)



 1 Side (s)

 0 Corner (s)

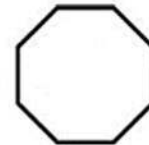
(e)



 4 Side (s)

 4 Corner (s)

(f)



 8 Side (s)

 8 Corner (s)

How Did You Do? 😊 😐 😞