

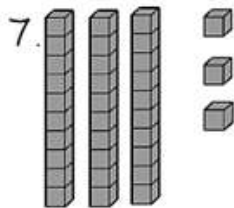
NAME: _____

BASE TEN BLOCKS WORKSHEETS

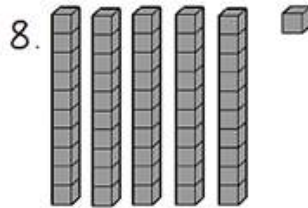
Directions: Write to tell how many tens and ones.

1. 28 is 2 tens and 8 ones.
2. 34 is 3 tens and 4 ones.
3. 72 is 7 tens and 2 ones.
4. 48 is 4 tens and 8 ones.
5. 33 is 3 tens and 3 ones.
6. 67 is 6 tens and 7 ones.

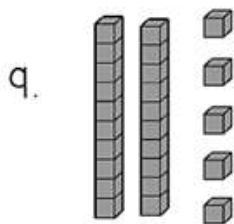
Directions: Write the number the blocks show.



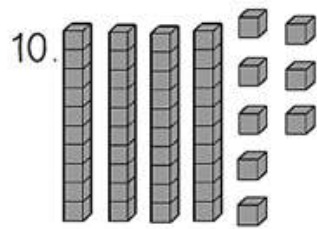
33



51



25



48

How Did You Do? 😊 😐 ☹️