


NAME: _____


10 MORE AND 10 LESS

Write the missing number.



$$27 - 10 = 17$$



$$66 - 10 = 56$$


$$53 - 10 = 43$$


$$30 - 10 = 20$$


$$42 - 10 = 32$$


$$94 - 10 = 84$$


$$89 - 10 = 79$$

How Did You Do? 😊 😐 😞