





















NAME: -----

This is how the children came to school on a Monday. Each symbol shows how one child got to school.

Walk							
Car							
Bike							
Bus							

- How many children walked to school? ____
- How many children can by bike? ____
- How many children came by car? ____
- How many children can on the school bus? ____
- How many children did not walk? ____
- How did most children come to school that day? _____

QUALIFICATION: 😊 😐 😞

Answer Key

- 7
- 4
- 6
- 3
- 13 (6 + 4 + 3)
- By Walking