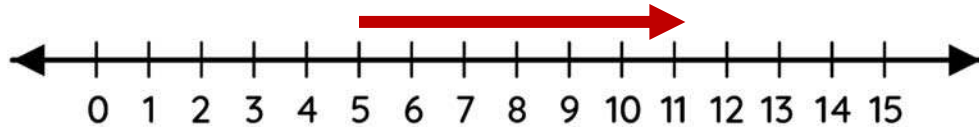


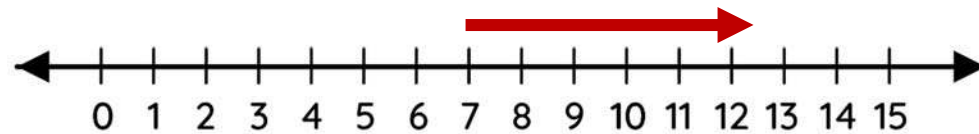
Name _____

Number line addition

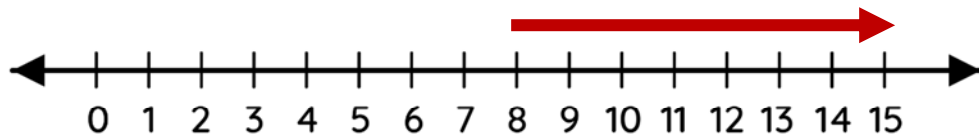
Solve the addition using number lines.



$$5 + 6 = 11$$



$$7 + 5 = 12$$



$$8 + 7 = 15$$