

NAME: _____

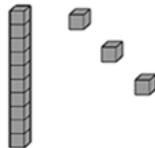
BASE TEN BLOCKS WORKSHEETS

Directions: Write the number.

1. One ten and four ones is 14.
2. One ten and three ones is 13.
3. One ten and eight ones is 18.
4. One ten and two ones is 12.
5. One ten and one one is 11.
6. One ten and six ones is 16.

Directions: Draw the number with base ten blocks.

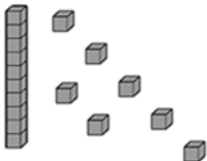
13



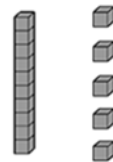
18



17



15



How Did You Do? 😊 😐 ☹️