




NAME: _____


10 MORE AND 10 LESS


Write the missing number.


 $44 + 10 = 54$


 $78 + 10 = 88$

 $17 + 10 = 27$

 $2 + 10 = 12$

 $31 + 10 = 41$

 $10 + 10 = 20$

 $40 + 10 = 50$

How Did You Do? 😊 😐 😞