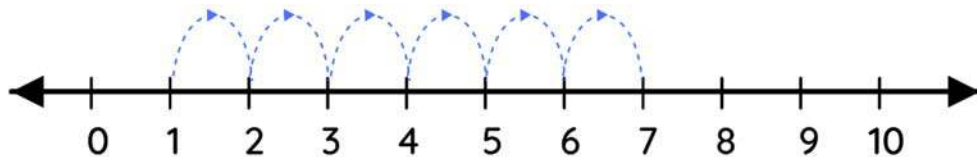


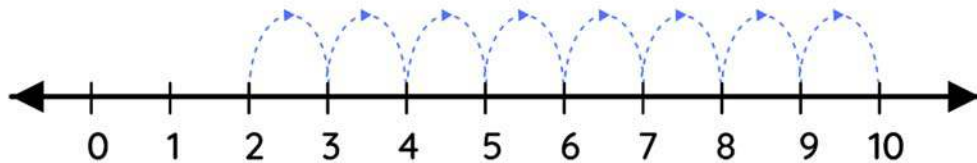
Name _____

Number line addition

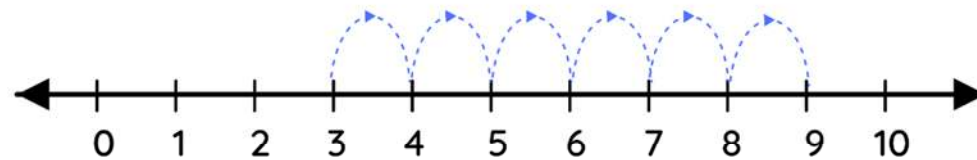
Observe the following number lines, write the missing numbers in the space.



$$\boxed{1} + \boxed{6} = \boxed{7}$$



$$\boxed{2} + \boxed{8} = \boxed{10}$$



$$\boxed{3} + \boxed{6} = \boxed{9}$$