




Name _____

NAME: _____

TALLY MARKS

Count and match the value to the numbers.

Animals	Tally Marks
	
	
	/

1. How many students chose cats? 3
2. How many students chose dogs? 3
3. How many students chose birds? 5
4. Which animal was the most favorite? birds
5. Which animal was the least favorite? dogs

QUALIFICATION:



Answer Key