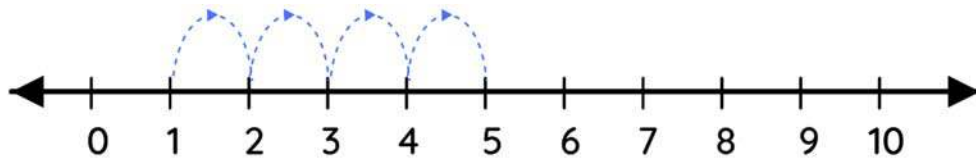


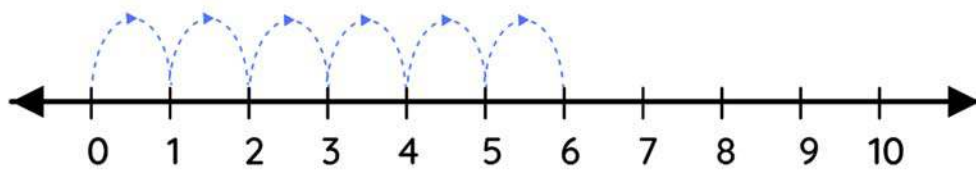
Name _____

Number line addition

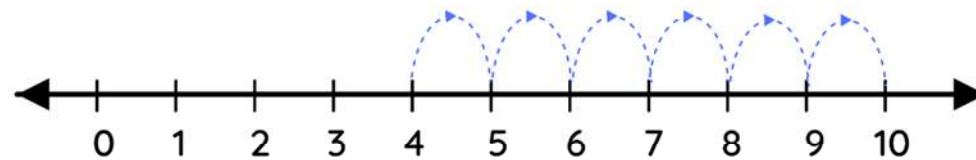
Observe the following number lines, write the missing numbers in the space.



$$\boxed{1} + \boxed{4} = \boxed{5}$$



$$\boxed{0} + \boxed{6} = \boxed{6}$$



$$\boxed{4} + \boxed{6} = \boxed{10}$$