


































NAME: \_\_\_\_\_

In Mrs. Mill's class students voted on their favorite shape. The graph below displays the results of the survey.

### My Favorite Shape

|   |   |   |   |   |   |
|---|---|---|---|---|---|
|   |   |   |   |   |  |
|  |   |   |   |   |  |
|  |   |   |  |   |  |
|  |  |   |  |  |  |
|  |  |   |  |  |  |
|  |  |  |  |  |  |
|  |  |  |  |  |  |
| Triangle  | Square  | Rectangle   | Pentagon  | Hexagon   | Octagon   |

- 1) Which shape got the most votes? \_\_\_\_\_
- 2) How many votes did the square get? \_\_\_\_\_ 
- 3) How many votes did the triangle get? \_\_\_\_\_ 
- 4) How many votes did the pentagon get? \_\_\_\_\_ 
- 5) How many votes did the hexagon get? \_\_\_\_\_ 
- 6) How many votes did the octagon get? \_\_\_\_\_ 
- 7) Which shape got the fewest votes? \_\_\_\_\_

QUALIFICATION:   