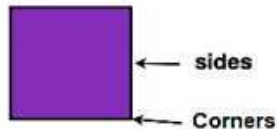


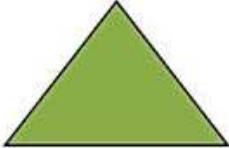
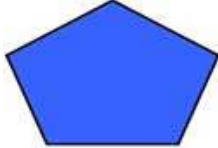

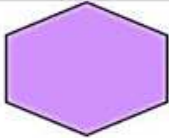




Answer Key

NAME: _____

COUNTING CORNERS AND SIDES

Write how many sides and vertices each shape has.



 <u>3</u> sides <u>3</u> Corners	 <u>5</u> sides <u>5</u> Corners
 <u>4</u> sides <u>4</u> Corners	 <u>6</u> sides <u>6</u> Corners
 <u>4</u> sides <u>4</u> Corners	 <u>1</u> sides <u>0</u> Corners
 <u>4</u> sides <u>4</u> Corners	 <u>3</u> sides <u>3</u> Corners

How Did You Do? 😊 😐 😞