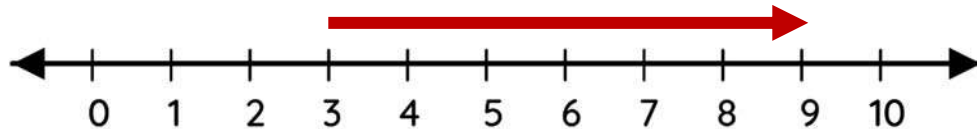


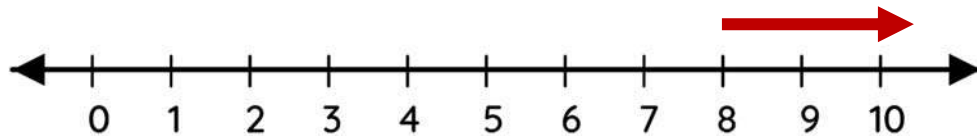
Name \_\_\_\_\_

## Number line addition

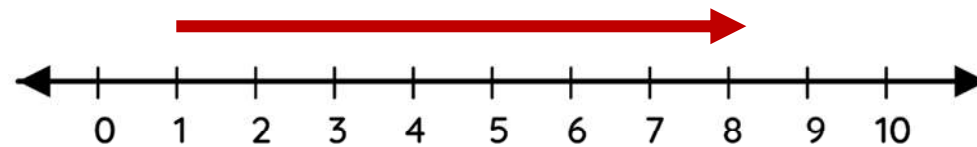
Solve the addition using number lines.



$$3 + 6 = 9$$



$$2 + 8 = 10$$



$$1 + 7 = 8$$