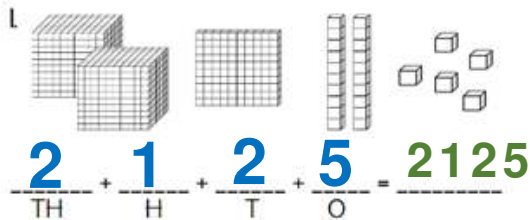


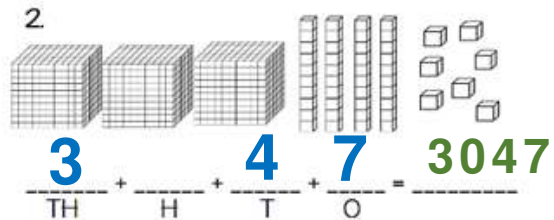
NAME: _____

BASE TEN BLOCKS WORKSHEETS

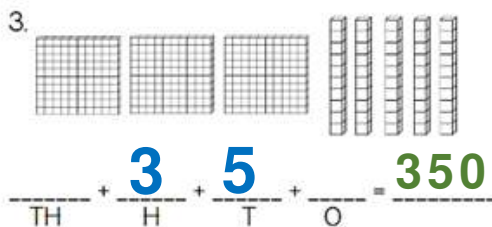
Students practice place value with this base 10 block practice! Identify place value using pictures, expanded form, and verb form of numbers.



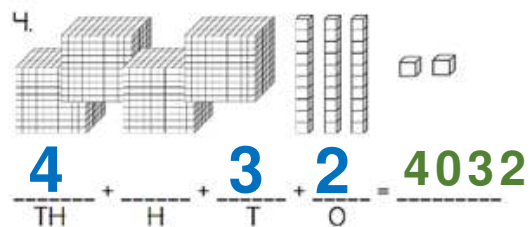
Word Form:
two thousand one hundred twenty-five



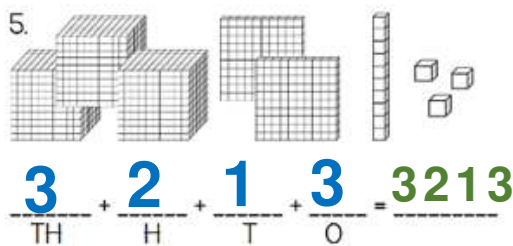
Word Form:
three thousand forty-seven



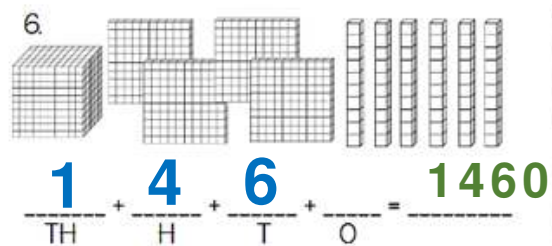
Word Form:
three hundred fifty



Word Form:
four thousand thirty-two



Word Form:
three thousand two hundred thirteen



Word Form:
one thousand four hundred sixty

How Did You Do? 😊 😐 ☹️