



Name \_\_\_\_\_

# Making 10


Each Box has two different kind of images. Count each set of images and write how many there are of each to make 10



\_\_\_\_\_ + \_\_\_\_\_ = 10



\_\_\_\_\_ + \_\_\_\_\_ = 10



\_\_\_\_\_ + \_\_\_\_\_ = 10