



NAME: _____

10 MORE AND 10 LESS


On the left of each value write 10 less. On the right of each value write 10 more.




62	72	82
----	----	----




36	46	56
----	----	----



20	30	40
----	----	----




78	88	98
----	----	----



31	41	51
----	----	----



15	25	35
----	----	----



49	59	69
----	----	----

How Did You Do? 😊 😐 ☹️