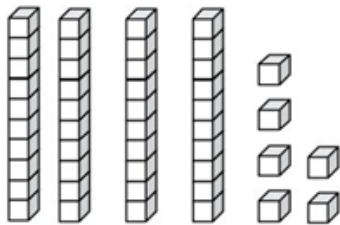


NAME: _____

PLACE VALUE

Indicates how many tens and ones are displayed. Then write the number.

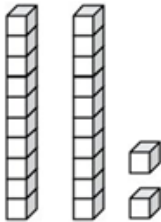
a.



tens	ones
4	6

number
46

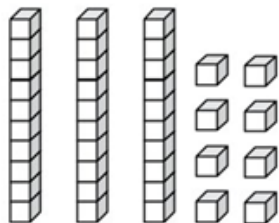
b.



tens	ones
2	2

number
22

c.



tens	ones
3	8

number
38

How Did You Do? 😊 😐 😞