


NAME: _____

MEASURE IN NON-STANDARD UNITS

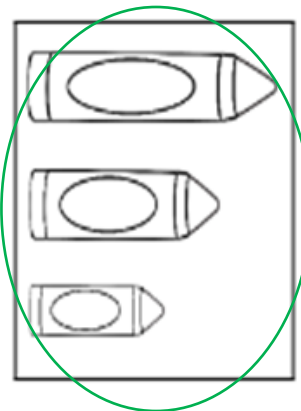
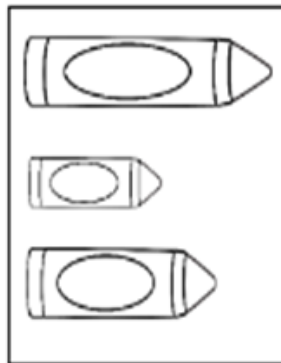
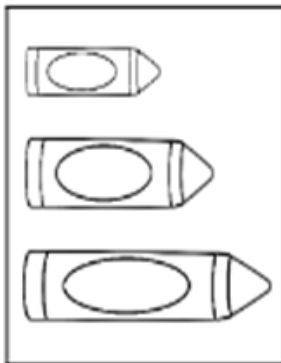
1. How long is the train?



The train is 6 cubes long.



2. Which one shows items in order from longest to shortest?



How Did You Do? 😊 😐 ☹️