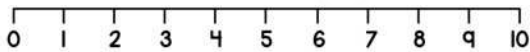


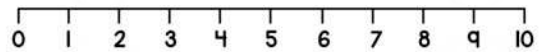
Name \_\_\_\_\_

## ADDITION ON NUMBER LINE

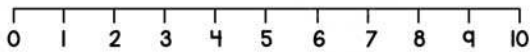
Using the number lines, complete the addition sentence and find the answer.



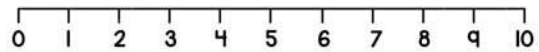
$$7 + 2 = \text{apple with } 9$$



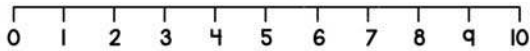
$$4 + 1 = \text{apple with } 5$$



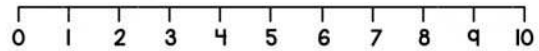
$$6 + 3 = \text{apple with } 9$$



$$5 + 2 = \text{apple with } 7$$



$$4 + 6 = \text{apple with } 10$$



$$9 + 1 = \text{apple with } 10$$