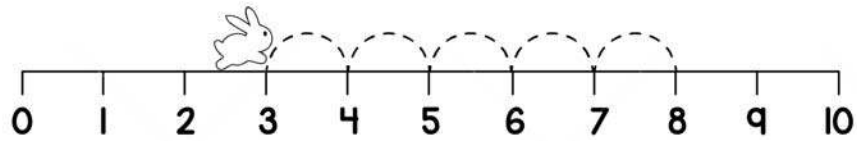


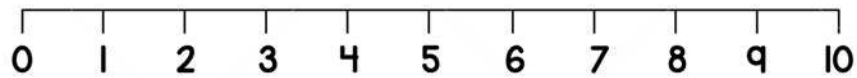
Name _____

ADDITION ON NUMBER LINE

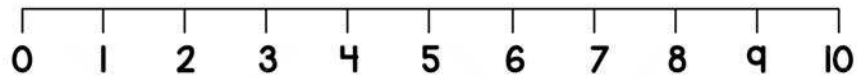
Solve the following by drawing hops on the number line.



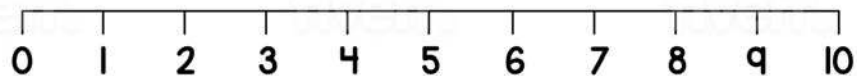
$$3 + 5 = 8$$



$$6 + 4 = 10$$



$$2 + 8 = 10$$



$$4 + 3 = 7$$