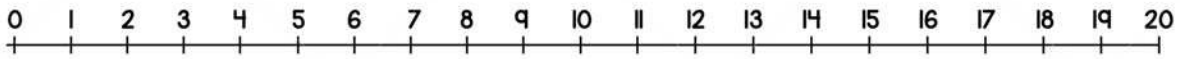


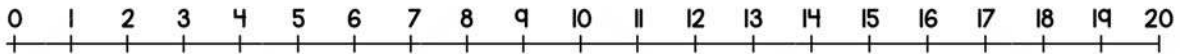
Name \_\_\_\_\_

## ADDITION ON NUMBER LINE

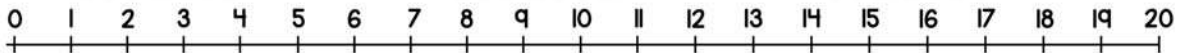
Solve the number line addition to 20.



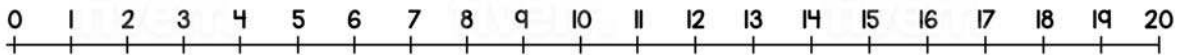
$$12 + 5 = \boxed{17}$$



$$8 + 9 = \boxed{17}$$



$$11 + 7 = \boxed{18}$$



$$15 + 5 = \boxed{20}$$