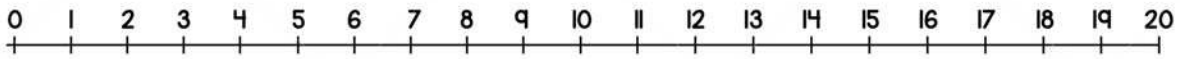


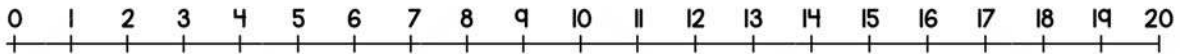
Name \_\_\_\_\_

## ADDITION ON NUMBER LINE

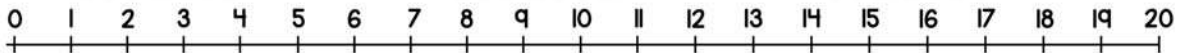
Solve the number line addition to 20.



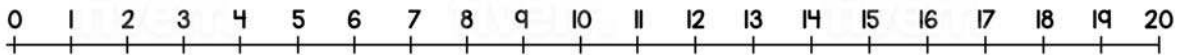
$$12 + 5 = \square$$



$$8 + 9 = \square$$



$$11 + 7 = \square$$



$$15 + 5 = \square$$