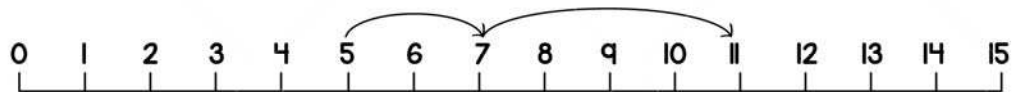


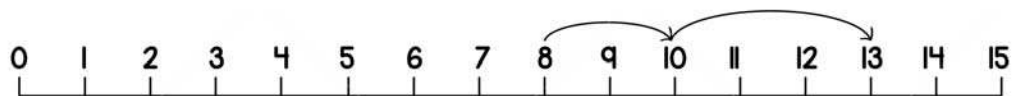
Name _____

ADDITION ON NUMBER LINE

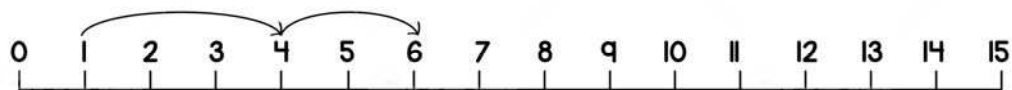
Using the number lines, complete the addition sentence and find the answer.



$$\boxed{5} + \boxed{2} + \boxed{4} = \underline{11}$$



$$\boxed{8} + \boxed{2} + \boxed{3} = \underline{13}$$



$$\boxed{1} + \boxed{3} + \boxed{2} = \underline{6}$$