
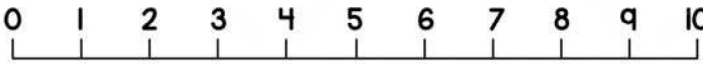



Name _____


ADDITION ON NUMBER LINE

Use the number lines to solve the addition.

$1 + 6 =$	 <p>A horizontal number line with tick marks labeled from 0 to 10.</p>
-----------	--

$3 + 2 =$	 <p>A horizontal number line with tick marks labeled from 0 to 10.</p>
-----------	--

$9 + 1 =$	 <p>A horizontal number line with tick marks labeled from 0 to 10.</p>
-----------	--

$4 + 4 =$	 <p>A horizontal number line with tick marks labeled from 0 to 10.</p>
-----------	--