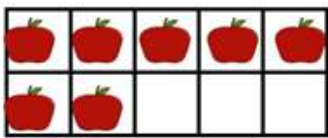
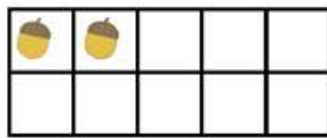
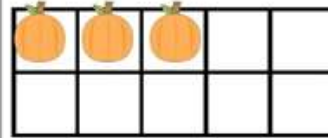

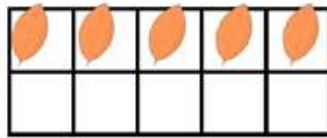
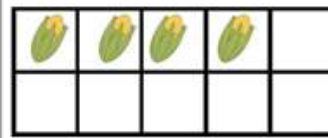


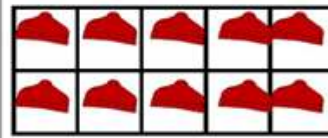


NAME: -----

## FIND THE NUMBER

Making 10: Fall theme

 $7 + \boxed{3} = 10$	 $2 + \boxed{8} = 10$	 $3 + \boxed{7} = 10$
 $6 + \boxed{4} = 10$	 $5 + \boxed{5} = 10$	 $4 + \boxed{6} = 10$
 $9 + \boxed{1} = 10$	 $8 + \boxed{2} = 10$	 $10 + \boxed{0} = 10$

How Did You Do? 😊 😐 ☹️