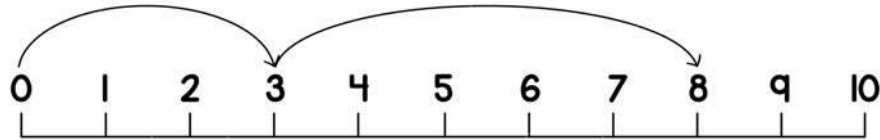


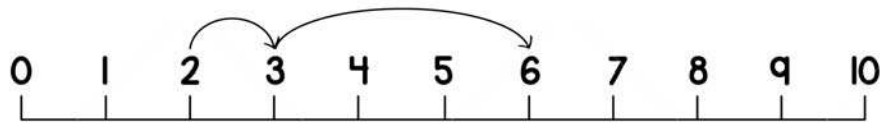
Name \_\_\_\_\_

## ADDITION ON NUMBER LINE

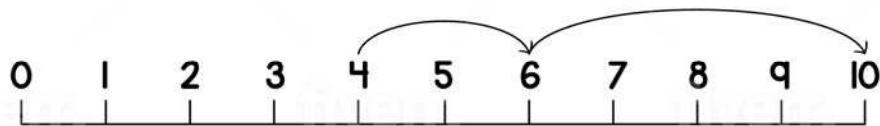
Using the number lines, complete the addition sentence and find the answer.



$$\boxed{3} + \boxed{5} = \underline{8}$$



$$\boxed{2} + \boxed{1} + \boxed{3} = \underline{6}$$



$$\boxed{4} + \boxed{2} + \boxed{4} = \underline{10}$$