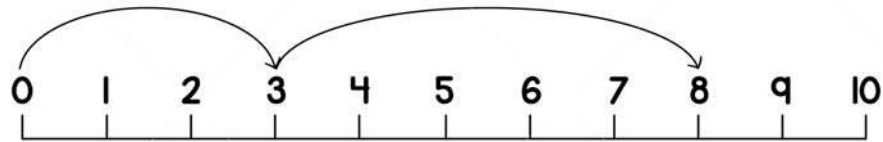


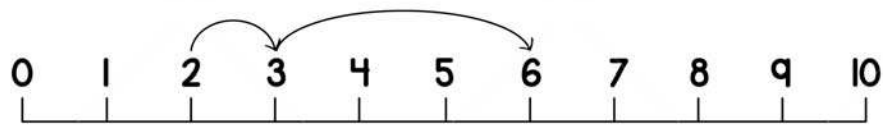
Name _____

ADDITION ON NUMBER LINE

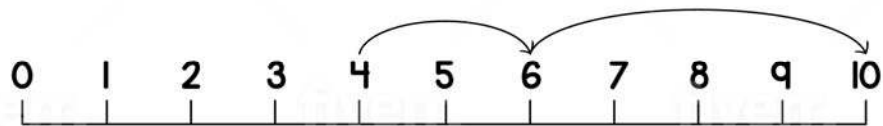
Using the number lines, complete the addition sentence and find the answer.



$$\square + \square = \underline{\quad}$$



$$\square + \square + \square = \underline{\quad}$$



$$\square + \square + \square = \underline{\quad}$$