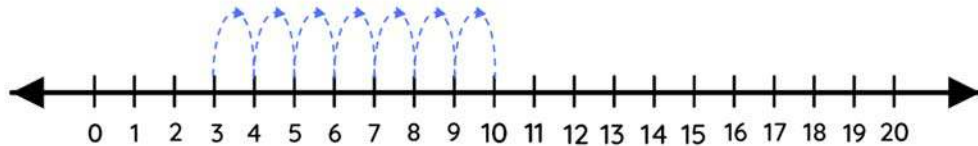


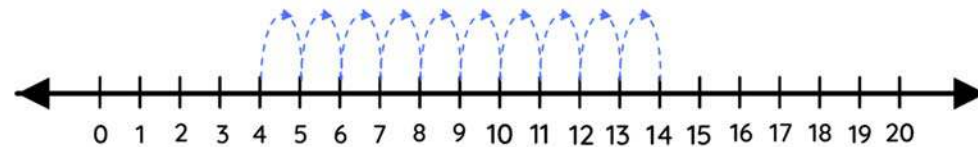
Name _____

Number line addition

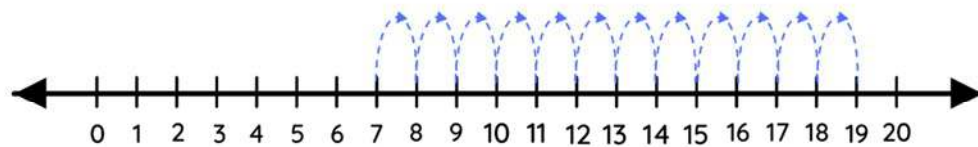
Observe the following number lines, write the missing numbers in the space.



$$\boxed{3} + \boxed{7} = \boxed{10}$$



$$\boxed{4} + \boxed{10} = \boxed{14}$$



$$\boxed{7} + \boxed{12} = \boxed{19}$$