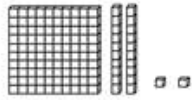




NAME: _____

BASE TEN BLOCKS WORKSHEETS


Greater than, less than or equal to $<$, $>$ or $=$.




Total: _____



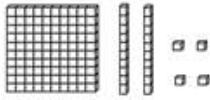
Total: _____





Total: _____



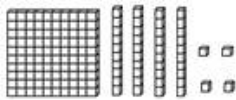
Total: _____




Total: _____



Total: _____



Total: _____



Total: _____

How Did You Do? 😊 😐 😞